


De tafel van 10

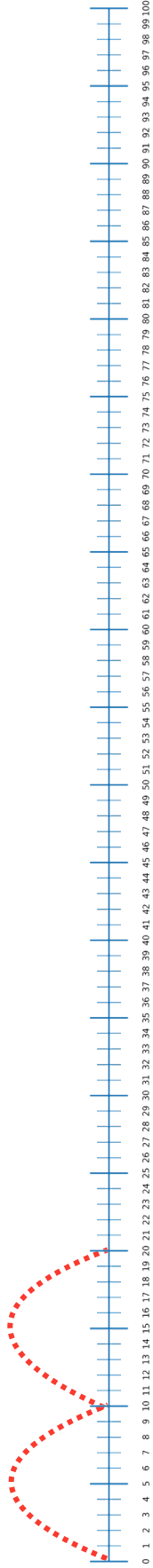


oefenboek

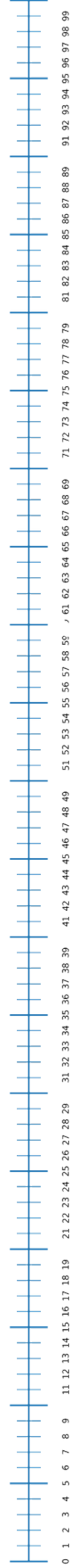
Naam:

de getallenlijn

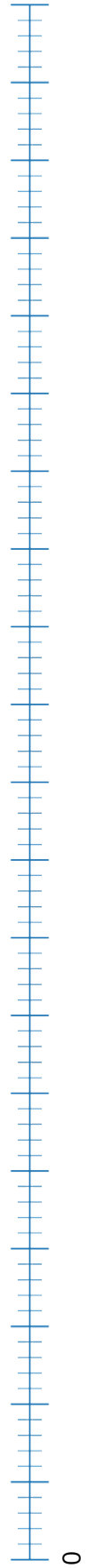
Maak sprongen van 10:



Maak sprongen van 10:
Schrijf de getallen op.

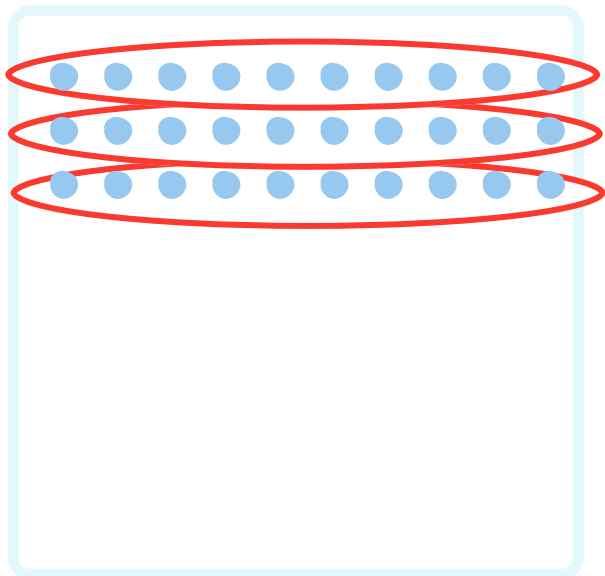


Maak sprongen van 10:
Schrijf de getallen op.




groepjes maken

Maak groepjes van 10:




..3.. groepjes

$$..3 \times 10 = 30$$




..... groepjes

$$..... \times 10 =$$



..... groepjes

$$..... \times 10 =$$




..... groepjes

$$..... \times 10 =$$


groepjes maken

Maak groepjes van 10:




..... groepjes

..... x 10 =




..... groepjes

..... x 10 =



..... groepjes

..... x 10 =




..... groepjes

..... x 10 =


keersommen maken




$$3 \times 10 = 30$$



$$\dots \times \dots = \dots$$



$$\dots \times \dots = \dots$$




$$\dots \times \dots = \dots$$



$$\dots \times \dots = \dots$$



$$\dots \times \dots = \dots$$



$$\dots \times \dots = \dots$$




$$\dots \times \dots = \dots$$

$$0 \times \dots = \dots$$



$$\dots \times \dots = \dots$$



$$\dots \times \dots = \dots$$



$$\dots \times \dots = \dots$$

teken de keersommen

Teken de keersommen

$5 \times 10 = \dots\dots$

$3 \times 10 = \dots\dots$

$9 \times 10 = \dots\dots$

$0 \times 10 = \dots\dots$

$6 \times 10 = \dots\dots$

$7 \times 10 = \dots\dots$

$1 \times 10 = \dots\dots$

$4 \times 10 = \dots\dots$


$8 \times 10 = \dots\dots$

$2 \times 10 = \dots\dots$


$11 \times 10 = \dots\dots$

$10 \times 10 = \dots\dots$

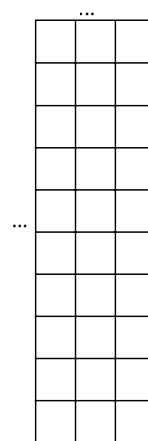
de verwisselstrategie



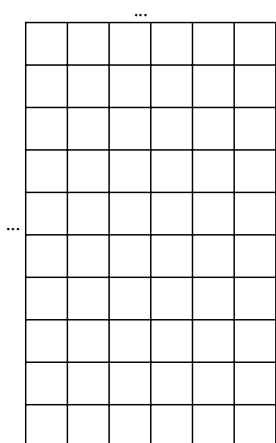
$7 \times 10 = \dots$
 $10 \times 7 = \dots$




$1 \times 10 = \dots$
 $10 \times 1 = \dots$




$3 \times 10 = \dots$
 $10 \times 3 = \dots$




$6 \times 10 = \dots$
 $10 \times 6 = \dots$



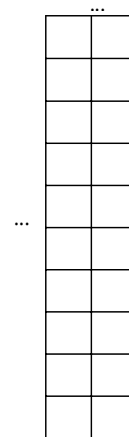
$10 \times 10 = \dots$
 $10 \times 10 = \dots$



$9 \times 10 = \dots$
 $10 \times 9 = \dots$

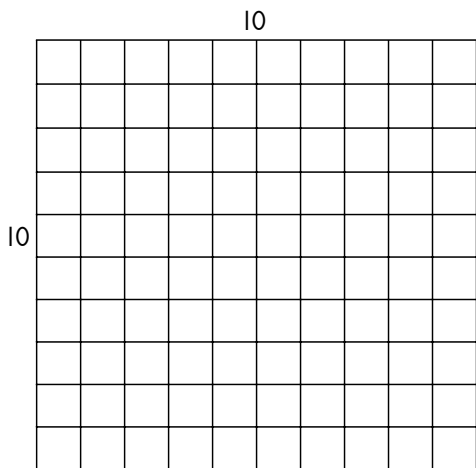


$5 \times 10 = \dots$
 $10 \times 5 = \dots$




$2 \times 10 = \dots$
 $10 \times 2 = \dots$


de verwisselstrategie




... x 10 =
10 x ... =




... x 10 =
10 x ... =



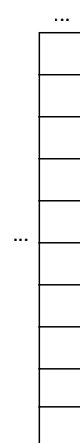
... x 10 =
10 x ... =




... x 10 =
10 x ... =




... x 10 =
10 x ... =



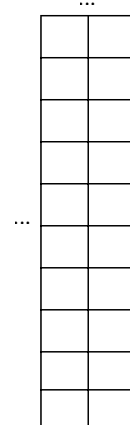
... x 10 =
10 x ... =



... x 10 =
10 x ... =



... x 10 =
10 x ... =



... x 10 =
10 x ... =

rijtjes oefenen

1 x 10 =
2 x 10 =
3 x 10 =
4 x 10 =
5 x 10 =
6 x 10 =
7 x 10 =
8 x 10 =
9 x 10 =
10 x 10 =

2 x 10 =
5 x 10 =
8 x 10 =
10 x 10 =
7 x 10 =
6 x 10 =
1 x 10 =
4 x 10 =
3 x 10 =
9 x 10 =

3 x 10 =
4 x 10 =
6 x 10 =
1 x 10 =
8 x 10 =
10 x 10 =
11 x 10 =
4 x 10 =
6 x 10 =
5 x 10 =

11 x 10 =
5 x 10 =
2 x 10 =
9 x 10 =
7 x 10 =
6 x 10 =
8 x 10 =
0 x 10 =
8 x 10 =
5 x 10 =

3 x 10 =
6 x 10 =
9 x 10 =
8 x 10 =
9 x 10 =
11 x 10 =
10 x 10 =
1 x 10 =
3 x 10 =
7 x 10 =

6 x 10 =
1 x 10 =
7 x 10 =
8 x 10 =
4 x 10 =
11 x 10 =
2 x 10 =
0 x 10 =
5 x 10 =
1 x 10 =

rijtjes oefenen

6 x 10 =
4 x 10 =
9 x 10 =
1 x 10 =
4 x 10 =
6 x 10 =
0 x 10 =
8 x 10 =
7 x 10 =
10 x 10 =

2 x 10 =
4 x 10 =
9 x 10 =
10 x 10 =
1 x 10 =
0 x 10 =
11 x 10 =
4 x 10 =
3 x 10 =
9 x 10 =

9 x 10 =
7 x 10 =
6 x 10 =
5 x 10 =
0 x 10 =
11 x 10 =
3 x 10 =
8 x 10 =
2 x 10 =
1 x 10 =

10 x 10 =
9 x 10 =
8 x 10 =
7 x 10 =
6 x 10 =
5 x 10 =
4 x 10 =
3 x 10 =
2 x 10 =
1 x 10 =

0 x 10 =
2 x 10 =
4 x 10 =
6 x 10 =
8 x 10 =
10 x 10 =
11 x 10 =
9 x 10 =
7 x 10 =
5 x 10 =

5 x 10 =
1 x 10 =
2 x 10 =
1 x 10 =
3 x 10 =
10 x 10 =
0 x 10 =
7 x 10 =
6 x 10 =
2 x 10 =

doolhof

Zoek de uitgang. Je mag alleen op de antwoorden van de tafel van 10 komen.

→











0	10	16	13	25	22	17
45	20	24	33	27	81	76
36	30	40	85	11	6	9
13	11	50	60	17	19	27
52	47	35	70	80	72	87
51	89	67	53	90	100	88
44	55	17	19	9	110	120











→











↓ En nu door elkaar. ↑








0	39	40	20	10	19	100
80	27	100	64	30	8	70
30	48	70	25	70	96	20
40	17	30	1	0	16	80
100	33	20	9	20	8	30
20	63	60	78	60	75	90
10	70	50	72	90	20	10








vleksommen








 $\times 10 = 30$
 $\times 10 = 10$
 $\times 10 = 70$
 $\times 10 = 40$
 $\times 10 = 100$
 $\times 10 = 50$
 $\times 10 = 80$
 $\times 10 = 40$
 $\times 10 = 0$
 $\times 10 = 20$

 $\times 10 = 40$
 $\times 10 = 60$
 $\times 10 = 80$
 $\times 10 = 10$
 $\times 10 = 30$
 $\times 10 = 90$
 $\times 10 = 80$
 $\times 10 = 0$
 $\times 10 = 60$
 $\times 10 = 50$

 $\times 10 = 90$
 $\times 10 = 80$
 $\times 10 = 30$
 $\times 10 = 100$
 $\times 10 = 20$
 $\times 10 = 50$
 $\times 10 = 10$
 $\times 10 = 40$
 $\times 10 = 80$
 $\times 10 = 30$

 $\times 10 = 60$
 $\times 10 = 30$
 $\times 10 = 50$
 $\times 10 = 40$
 $\times 10 = 20$
 $\times 10 = 100$
 $\times 10 = 80$

 $\times 10 = 20$
 $\times 10 = 10$
 $\times 10 = 0$
 $\times 10 = 30$
 $\times 10 = 10$
 $\times 10 = 80$
 $\times 10 = 60$

 $\times 10 = 80$
 $\times 10 = 60$
 $\times 10 = 40$
 $\times 10 = 50$
 $\times 10 = 20$
 $\times 10 = 100$
 $\times 10 = 80$

verhaaltjes

Lees het verhaal:

Ik heb 10 vingers.
Hoeveel vingers hebben mijn
zus en ik samen?

De som is: x =

Teken de som:




Lees het verhaal:

Ik doe elke week 10 euro in mijn
spaarpot.
Hoeveel geld heb ik na 10 weken
sparen?

De som is: x =

Teken de som:




Lees het verhaal:

Mijn konijn krijgt elke dag 10
snoepjes.
Hoeveel snoepjes krijgt hij per
week?

De som is: x =

Teken de som:




Lees het verhaal:

Een doos Lego kost 10 euro.
Ik koop 4 dozen Lego.
Hoeveel moet ik betalen?

De som is: x =

Teken de som:



verhaaltjes

Lees het verhaal:

In 1 zakje zitten 10 snoepjes.
Ik koop een zakje voor mijn
broer, mijn zus en voor mijzelf.
Hoeveel snoepjes heb ik
gekocht?

De som is: x =

Teken de som:

Lees het verhaal:

Een zak appels kost 5 euro.

Ik koop 10 zakken appels.
Hoeveel moet ik betalen?

De som is: x =

Teken de som:

Lees het verhaal:

Een kat heeft 2 oren.
Ik heb 10 katten.
Hoeveel oortjes zijn dat samen?

De som is: x =

Teken de som:

Lees het verhaal:

Een spelletje Roblox duurt 10
minuten. Ik speel 8 spelletjes.
Hoeveel minuten speel ik
Roblox?

De som is: x =

Teken de som: