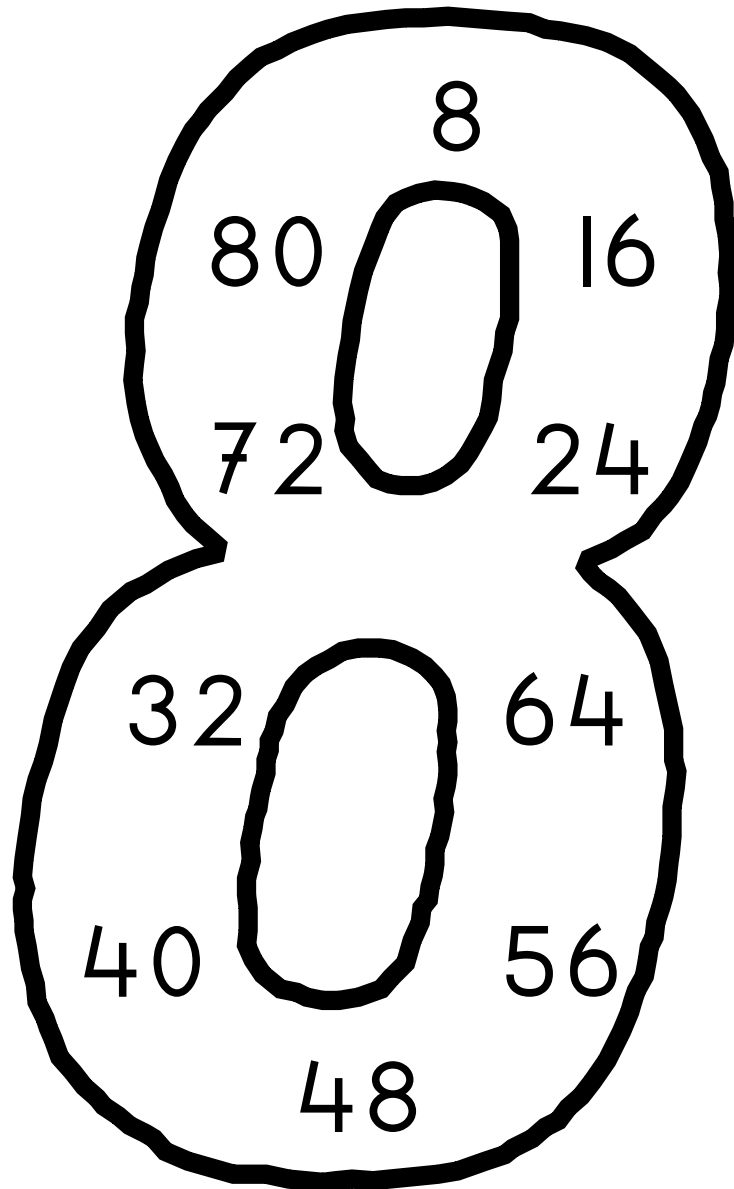


De tafel van 8

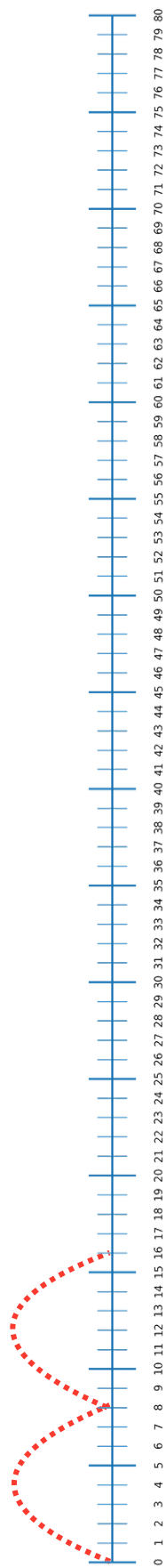


oefenboek

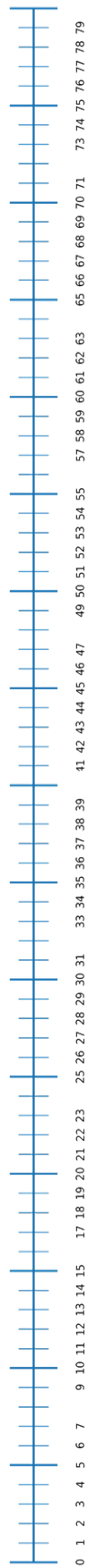
Naam:

de getallenlijn

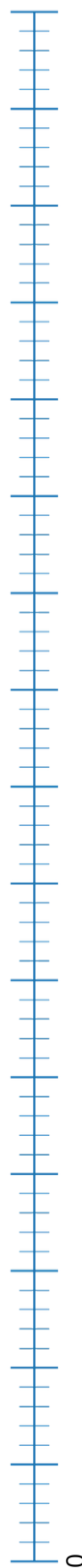
Maak sprongen van 8:



Maak sprongen van 8:
Schrijf de getallen op.

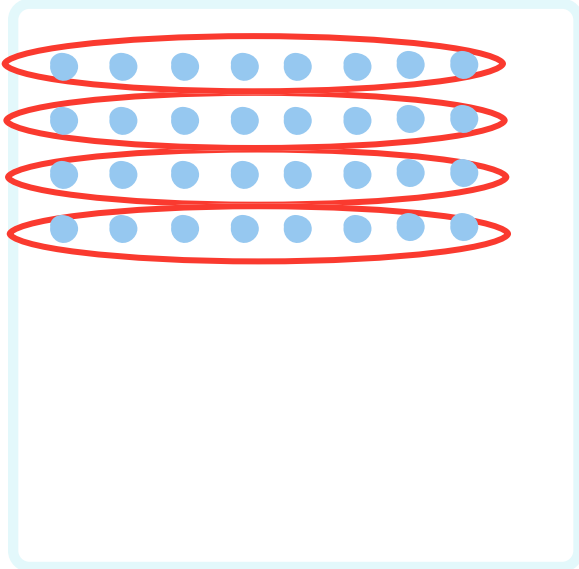


Maak sprongen van 8:
Schrijf de getallen op.




groepjes maken

Maak groepjes van 8:




4 groepjes

$$4 \times 8 = 32$$




..... groepjes

$$..... \times 8 =$$



..... groepjes

$$..... \times 8 =$$




..... groepjes

$$..... \times 8 =$$


groepjes maken

Maak groepjes van 8:




..... groepjes

$$\dots \times 8 = \dots$$




..... groepjes

$$\dots \times 8 = \dots$$



..... groepjes

$$\dots \times 8 = \dots$$



..... groepjes

$$\dots \times 8 = \dots$$

erbij 8

$$\begin{array}{l} 1 \times 8 = 8 \\ 2 \times 8 = \dots \end{array} \quad \left. \vphantom{\begin{array}{l} 1 \times 8 = 8 \\ 2 \times 8 = \dots \end{array}} \right) +8$$

$$\begin{array}{l} 2 \times 8 = 16 \\ 3 \times 8 = \dots \end{array} \quad \left. \vphantom{\begin{array}{l} 2 \times 8 = 16 \\ 3 \times 8 = \dots \end{array}} \right) +8$$

$$\begin{array}{l} 3 \times 8 = 24 \\ 4 \times 8 = \dots \end{array} \quad \left. \vphantom{\begin{array}{l} 3 \times 8 = 24 \\ 4 \times 8 = \dots \end{array}} \right) +8$$

$$\begin{array}{l} 4 \times 8 = 32 \\ 5 \times 8 = \dots \end{array} \quad \left. \vphantom{\begin{array}{l} 4 \times 8 = 32 \\ 5 \times 8 = \dots \end{array}} \right) +8$$

$$\begin{array}{l} 5 \times 8 = 40 \\ 6 \times 8 = \dots \end{array} \quad \left. \vphantom{\begin{array}{l} 5 \times 8 = 40 \\ 6 \times 8 = \dots \end{array}} \right) +8$$

$$\begin{array}{l} 6 \times 8 = 48 \\ 7 \times 8 = \dots \end{array} \quad \left. \vphantom{\begin{array}{l} 6 \times 8 = 48 \\ 7 \times 8 = \dots \end{array}} \right) +8$$

$$\begin{array}{l} 7 \times 8 = 56 \\ 8 \times 8 = \dots \end{array} \quad \left. \vphantom{\begin{array}{l} 7 \times 8 = 56 \\ 8 \times 8 = \dots \end{array}} \right) +8$$

$$\begin{array}{l} 8 \times 8 = 64 \\ 9 \times 8 = \dots \end{array} \quad \left. \vphantom{\begin{array}{l} 8 \times 8 = 64 \\ 9 \times 8 = \dots \end{array}} \right) +8$$

$$\begin{array}{l} 9 \times 8 = 72 \\ 10 \times 8 = \dots \end{array} \quad \left. \vphantom{\begin{array}{l} 9 \times 8 = 72 \\ 10 \times 8 = \dots \end{array}} \right) +8$$

$$\begin{array}{l} 10 \times 8 = 80 \\ 11 \times 8 = \dots \end{array} \quad \left. \vphantom{\begin{array}{l} 10 \times 8 = 80 \\ 11 \times 8 = \dots \end{array}} \right) +8$$

eraf 8

$$\begin{array}{l} 11 \times 8 = 88 \\ 10 \times 8 = \dots \end{array} \quad \left. \vphantom{\begin{array}{l} 11 \times 8 = 88 \\ 10 \times 8 = \dots \end{array}} \right) -8$$

$$\begin{array}{l} 10 \times 8 = 80 \\ 9 \times 8 = \dots \end{array} \quad \left. \vphantom{\begin{array}{l} 10 \times 8 = 80 \\ 9 \times 8 = \dots \end{array}} \right) -8$$

$$\begin{array}{l} 9 \times 8 = 72 \\ 8 \times 8 = \dots \end{array} \quad \left. \vphantom{\begin{array}{l} 9 \times 8 = 72 \\ 8 \times 8 = \dots \end{array}} \right) -8$$

$$\begin{array}{l} 8 \times 8 = 64 \\ 7 \times 8 = \dots \end{array} \quad \left. \vphantom{\begin{array}{l} 8 \times 8 = 64 \\ 7 \times 8 = \dots \end{array}} \right) -8$$

$$\begin{array}{l} 7 \times 8 = 56 \\ 6 \times 8 = \dots \end{array} \quad \left. \vphantom{\begin{array}{l} 7 \times 8 = 56 \\ 6 \times 8 = \dots \end{array}} \right) -8$$

$$\begin{array}{l} 6 \times 8 = 48 \\ 5 \times 8 = \dots \end{array} \quad \left. \vphantom{\begin{array}{l} 6 \times 8 = 48 \\ 5 \times 8 = \dots \end{array}} \right) -8$$

$$\begin{array}{l} 5 \times 8 = 40 \\ 4 \times 8 = \dots \end{array} \quad \left. \vphantom{\begin{array}{l} 5 \times 8 = 40 \\ 4 \times 8 = \dots \end{array}} \right) -8$$

$$\begin{array}{l} 4 \times 8 = 32 \\ 3 \times 8 = \dots \end{array} \quad \left. \vphantom{\begin{array}{l} 4 \times 8 = 32 \\ 3 \times 8 = \dots \end{array}} \right) -8$$

$$\begin{array}{l} 3 \times 8 = 24 \\ 2 \times 8 = \dots \end{array} \quad \left. \vphantom{\begin{array}{l} 3 \times 8 = 24 \\ 2 \times 8 = \dots \end{array}} \right) -8$$

$$\begin{array}{l} 2 \times 8 = 16 \\ 1 \times 8 = \dots \end{array} \quad \left. \vphantom{\begin{array}{l} 2 \times 8 = 16 \\ 1 \times 8 = \dots \end{array}} \right) -8$$

keersommen maken



$$2 \times 8 = 16$$



$$\dots \times \dots = \dots$$



$$\dots \times \dots = \dots$$



$$\dots \times \dots = \dots$$



$$\dots \times \dots = \dots$$



$$\dots \times \dots = \dots$$



$$\dots \times \dots = \dots$$

$$0 \dots \times \dots = \dots$$



$$\dots \times \dots = \dots$$



$$\dots \times \dots = \dots$$



$$\dots \times \dots = \dots$$



$$\dots \times \dots = \dots$$

teken de keersommen

Teken de keersommen

$5 \times 8 = \dots\dots$

$3 \times 8 = \dots\dots$

$9 \times 8 = \dots\dots$

$0 \times 8 = \dots\dots$

$6 \times 8 = \dots\dots$

$7 \times 8 = \dots\dots$

$1 \times 8 = \dots\dots$

$4 \times 8 = \dots\dots$

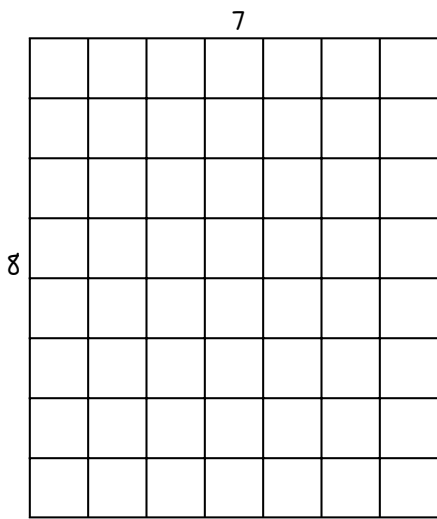
$8 \times 8 = \dots\dots$

$2 \times 8 = \dots\dots$

$11 \times 8 = \dots\dots$

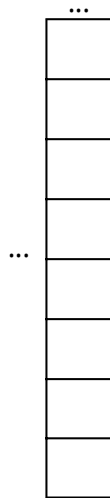
$10 \times 8 = \dots\dots$

de verwisselstrategie



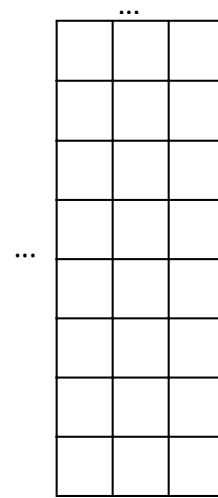
$7 \times 8 = \dots$

$8 \times 7 = \dots$



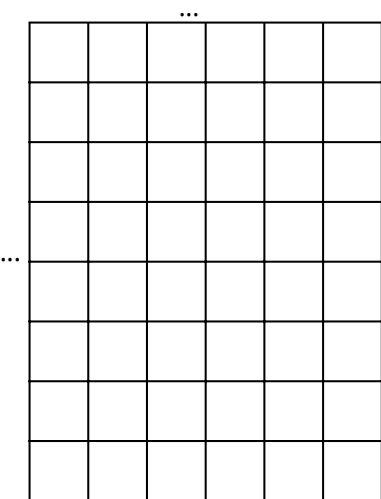
$1 \times 8 = \dots$

$8 \times 1 = \dots$



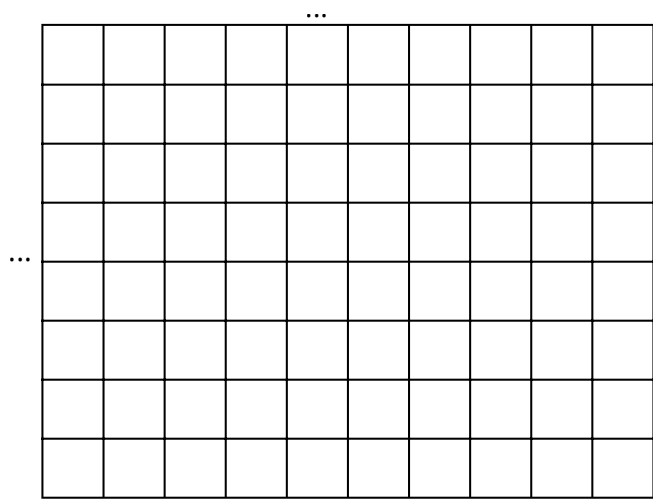
$3 \times 8 = \dots$

$8 \times 3 = \dots$



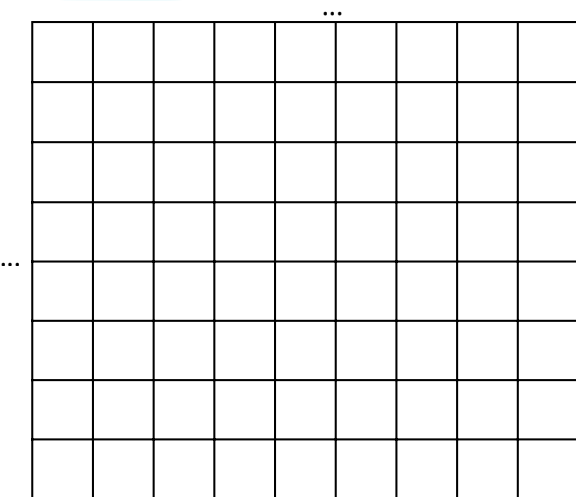
$6 \times 8 = \dots$

$8 \times 6 = \dots$




$10 \times 8 = \dots$

$8 \times 10 = \dots$



$9 \times 8 = \dots$

$8 \times 9 = \dots$



$5 \times 8 = \dots$

$8 \times 5 = \dots$

de verwisselstrategie

10

| | | | | | | | | | |
|--|--|--|--|--|--|--|--|--|--|
| | | | | | | | | | |
| | | | | | | | | | |
| | | | | | | | | | |
| | | | | | | | | | |
| | | | | | | | | | |
| | | | | | | | | | |
| | | | | | | | | | |
| | | | | | | | | | |
| | | | | | | | | | |
| | | | | | | | | | |
| | | | | | | | | | |

8

$... \times 8 = ...$
 $8 \times ... = ...$

...

| | | | | | |
|--|--|--|--|--|--|
| | | | | | |
| | | | | | |
| | | | | | |
| | | | | | |
| | | | | | |
| | | | | | |
| | | | | | |
| | | | | | |
| | | | | | |
| | | | | | |
| | | | | | |

...

$... \times 8 = ...$
 $8 \times ... = ...$

...

| | | |
|--|--|--|
| | | |
| | | |
| | | |
| | | |
| | | |
| | | |
| | | |
| | | |
| | | |
| | | |
| | | |

...

$... \times 8 = ...$
 $8 \times ... = ...$

...

| | | | | |
|--|--|--|--|--|
| | | | | |
| | | | | |
| | | | | |
| | | | | |
| | | | | |
| | | | | |
| | | | | |
| | | | | |
| | | | | |
| | | | | |
| | | | | |

...

$... \times 8 = ...$
 $8 \times ... = ...$

...

| | | | |
|--|--|--|--|
| | | | |
| | | | |
| | | | |
| | | | |
| | | | |
| | | | |
| | | | |
| | | | |
| | | | |
| | | | |
| | | | |

...

$... \times 8 = ...$
 $8 \times ... = ...$

...

| | | | | | | | |
|--|--|--|--|--|--|--|--|
| | | | | | | | |
| | | | | | | | |
| | | | | | | | |
| | | | | | | | |
| | | | | | | | |
| | | | | | | | |
| | | | | | | | |
| | | | | | | | |
| | | | | | | | |
| | | | | | | | |
| | | | | | | | |

...

$... \times 8 = ...$
 $8 \times ... = ...$

rijtjes oefenen

$1 \times 8 = \dots$

$2 \times 8 = \dots$

$3 \times 8 = \dots$

$4 \times 8 = \dots$

$5 \times 8 = \dots$

$6 \times 8 = \dots$

$7 \times 8 = \dots$

$8 \times 8 = \dots$

$9 \times 8 = \dots$

$10 \times 8 = \dots$

$2 \times 8 = \dots$

$5 \times 8 = \dots$

$8 \times 8 = \dots$

$10 \times 8 = \dots$

$7 \times 8 = \dots$

$6 \times 8 = \dots$

$1 \times 8 = \dots$

$4 \times 8 = \dots$

$3 \times 8 = \dots$

$9 \times 8 = \dots$

$3 \times 8 = \dots$

$4 \times 8 = \dots$

$6 \times 8 = \dots$

$1 \times 8 = \dots$

$8 \times 8 = \dots$

$10 \times 8 = \dots$

$11 \times 8 = \dots$

$4 \times 8 = \dots$

$6 \times 8 = \dots$

$5 \times 8 = \dots$

$11 \times 8 = \dots$

$5 \times 8 = \dots$

$2 \times 8 = \dots$

$9 \times 8 = \dots$

$7 \times 8 = \dots$

$6 \times 8 = \dots$

$8 \times 8 = \dots$

$0 \times 8 = \dots$

$8 \times 8 = \dots$

$5 \times 8 = \dots$

$3 \times 8 = \dots$

$6 \times 8 = \dots$

$9 \times 8 = \dots$

$8 \times 8 = \dots$

$9 \times 8 = \dots$

$11 \times 8 = \dots$

$10 \times 8 = \dots$

$1 \times 8 = \dots$

$3 \times 8 = \dots$

$7 \times 8 = \dots$

$6 \times 8 = \dots$

$1 \times 8 = \dots$

$7 \times 8 = \dots$

$8 \times 8 = \dots$

$4 \times 8 = \dots$

$11 \times 8 = \dots$

$2 \times 8 = \dots$

$0 \times 8 = \dots$

$5 \times 8 = \dots$

$1 \times 8 = \dots$

rijtjes oefenen

6 x 8 =
4 x 8 =
9 x 8 =
1 x 8 =
4 x 8 =
6 x 8 =
0 x 8 =
8 x 8 =
7 x 8 =
10 x 8 =

2 x 8 =
4 x 8 =
9 x 8 =
10 x 8 =
1 x 8 =
0 x 8 =
11 x 8 =
4 x 8 =
3 x 8 =
9 x 8 =

9 x 8 =
7 x 8 =
6 x 8 =
5 x 8 =
0 x 8 =
11 x 8 =
3 x 8 =
8 x 8 =
2 x 8 =
1 x 8 =

10 x 8 =
9 x 8 =
8 x 8 =
7 x 8 =
6 x 8 =
5 x 8 =
4 x 8 =
3 x 8 =
2 x 8 =
1 x 8 =

0 x 8 =
2 x 8 =
4 x 8 =
6 x 8 =
8 x 8 =
10 x 8 =
11 x 8 =
9 x 8 =
7 x 8 =
5 x 8 =

5 x 8 =
1 x 8 =
2 x 8 =
1 x 8 =
3 x 8 =
10 x 8 =
0 x 8 =
7 x 8 =
6 x 8 =
2 x 8 =

doolhof

Zoek de uitgang. Je mag alleen op de antwoorden van de tafel van 8 komen.

→

| | | | | | | |
|----|----|----|----|----|----|----|
| 0 | 8 | 16 | 13 | 25 | 22 | 17 |
| 45 | 67 | 24 | 33 | 27 | 81 | 76 |
| 36 | 49 | 32 | 50 | 11 | 6 | 9 |
| 13 | 11 | 40 | 48 | 17 | 19 | 27 |
| 52 | 47 | 35 | 56 | 64 | 72 | 80 |
| 51 | 89 | 67 | 53 | 22 | 13 | 88 |
| 44 | 55 | 17 | 19 | 9 | 4 | 96 |

↓ En nu door elkaar.


| | | | | | | |
|----|----|----|----|----|----|----|
| 0 | 30 | 43 | 23 | 15 | 19 | 27 |
| 88 | 27 | 48 | 80 | 32 | 8 | 33 |
| 32 | 40 | 24 | 25 | 76 | 96 | 43 |
| 47 | 17 | 9 | 1 | 11 | 16 | 82 |
| 36 | 33 | 67 | 9 | 24 | 8 | 14 |
| 22 | 63 | 74 | 80 | 64 | 75 | 33 |
| 29 | 71 | 55 | 72 | 35 | 31 | 10 |





Hoeveel spinnenpootjes zie je hier?


..... x =


vleksommen


 $x 8 = 24$


 $x 8 = 8$


 $x 8 = 72$


 $x 8 = 48$


 $x 8 = 32$


 $x 8 = 56$


 $x 8 = 80$


 $x 8 = 40$


 $x 8 = 0$


 $x 8 = 24$


 $x 8 = 48$


 $x 8 = 64$


 $x 8 = 80$


 $x 8 = 16$

 $x 8 = 32$


 $x 8 = 24$


 $x 8 = 8$


 $x 8 = 0$


 $x 8 = 16$


 $x 8 = 56$


 $x 8 = 80$


 $x 8 = 88$


 $x 8 = 32$


 $x 8 = 0$


 $x 8 = 24$


 $x 8 = 56$


 $x 8 = 72$


 $x 8 = 40$


 $x 8 = 8$

 $x 8 = 32$


 $x 8 = 64$


 $x 8 = 8$


 $x 8 = 16$


 $x 8 = 40$


 $x 8 = 24$


 $x 8 = 56$

 $x 8 = 72$


 $x 8 = 48$

 $x 8 = 56$


 $x 8 = 8$


 $x 8 = 32$


 $x 8 = 16$


 $x 8 = 88$


 $x 8 = 0$


 $x 8 = 80$


 $x 8 = 16$

 $x 8 = 40$

 $x 8 = 64$

 $x 8 = 24$

 $x 8 = 40$

 $x 8 = 88$

verhaaltjes

Lees het verhaal:

In 1 zak zitten 8 broodjes.
Ik koop 3 zakken.
Hoeveel broodjes heb ik?

De som is: x =

Teken de som:




Lees het verhaal:

Een spin heeft 8 pootjes.
Onder mijn bed zitten 9 spinnen.
Hoeveel pootjes zijn dat?

De som is: x =

Teken de som:




Lees het verhaal:

Elke vaas heeft 8 bloemen.
Ik heb 5 vazen met bloemen.
Hoeveel bloemen heb ik?

De som is: x =

Teken de som:




Lees het verhaal:

Een boek kost 8 euro.
Ik koop 7 boeken.
Hoeveel moet ik betalen?

De som is: x =

Teken de som:



verhaaltjes

Lees het verhaal:

Ik koop 3 zakken met peren.

In elke zak zitten 8 peren.
Hoeveel peren heb ik?

De som is: x =

Teken de som:

Lees het verhaal:

Een voetbal kost 8 euro.

Ik koop 10 voetballen.
Hoeveel moet ik betalen?

De som is: x =

Teken de som:

Lees het verhaal:

Ik verkoop koekjes.
Elke doos kost 8 euro.
Ik verkoop op maandag 4 dozen.
Hoeveel euro is dat?

De som is: x =

Teken de som:

Lees het verhaal:

Een octopus heeft 8 armen.
Hoeveel armen hebben 6
octopussen?

De som is: x =

Teken de som: